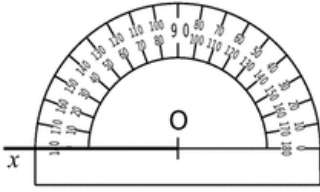
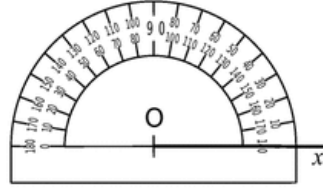


## Fiche d'exercices: constructions d'angles

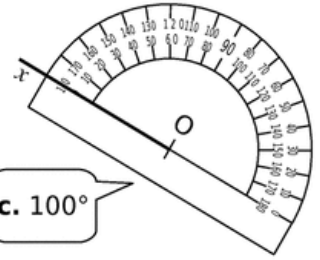
**1** Dans chaque cas, construis la demi-droite  $[Oy)$  telle que l'angle  $\widehat{xOy}$  ait la mesure indiquée.



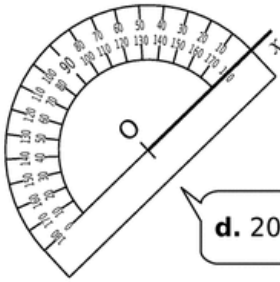
a.  $50^\circ$



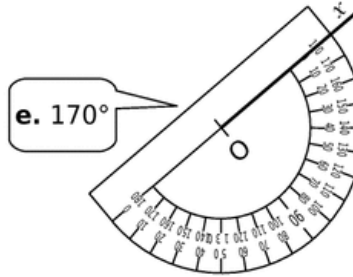
b.  $120^\circ$



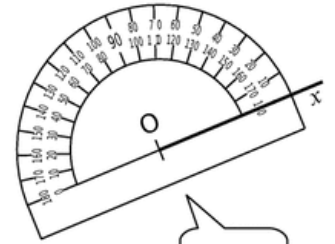
c.  $100^\circ$



d.  $20^\circ$

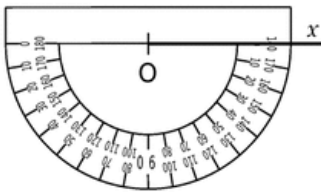


e.  $170^\circ$

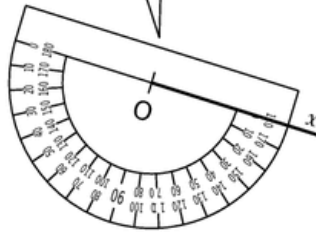


f.  $90^\circ$

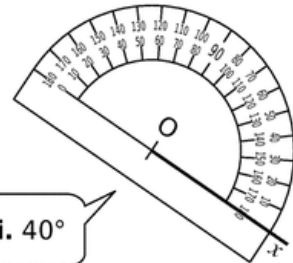
g.  $125^\circ$



h.  $35^\circ$

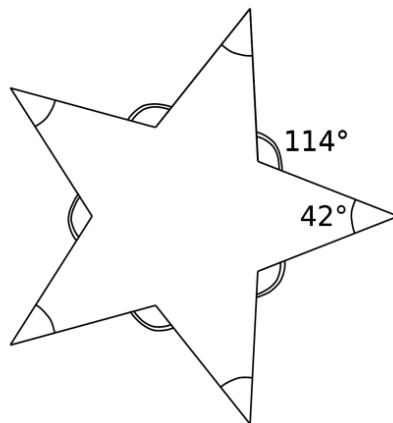


i.  $40^\circ$



### 2 Étoile

Chaque côté de l'étoile mesure 3,5 cm.  
Reproduis l'étoile ci-contre en respectant les données.



**3** À partir du carré grisé, reproduis la figure ci-dessous en utilisant tes instruments de géométrie.

